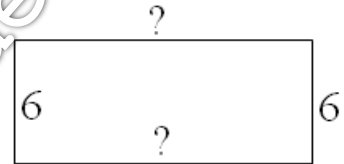


Worksheet For: «Name»		Student ID: «StudentID»		WS ID:«WSID»
Date:		Start time:		End time:
Overall %:	Score obtained:	Operations	Mixed Review	Critical Thinking
	(Section Wise)	_____ of _____	_____ of _____	_____ of 5

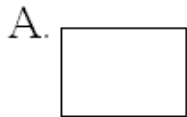
Problem Solving and Critical Thinking:

1. Each side of a square shaped chess board is 15 inches long. What is the perimeter of the chess board?

2. The perimeter of a rectangle (shown on the right) is 28. The rectangle is 6 units wide. What is the length of the rectangle?



3. Circle the one that does not belong.



B.



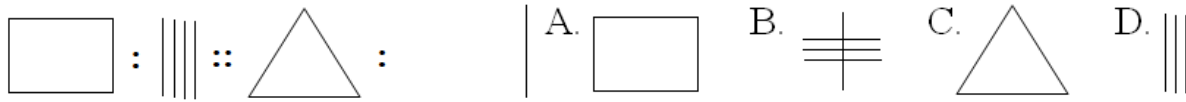
C.



D.



4. Choose the shape from the list and draw it in the space to complete the analogy:



5. Ajmal is a good soccer player. He scored 6 goals in the two matches last week. He played three matches this week and scored 2 goals more than the last week. How many goals did Ajmal score in all?