

Math Mixed Review (Algebra): Find the slope of the line containing these two points:

1. $(0, -3)$ and $(1, -2)$

2. $(5, 7)$ and $(-2, -6)$

3. $(-2, 4)$ and $(-4, -2)$

4. $(3, 6)$ and $(7, 1)$

5. $(2, -5)$ and $(1, 4)$

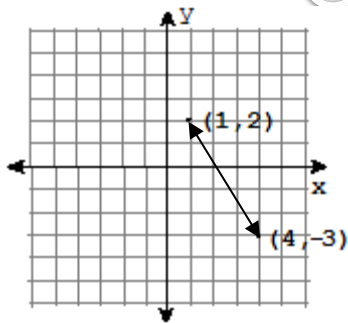
6. $(6, 2)$ and $(-3, 0)$

7. $(-2, -5)$ and $(6, 0)$

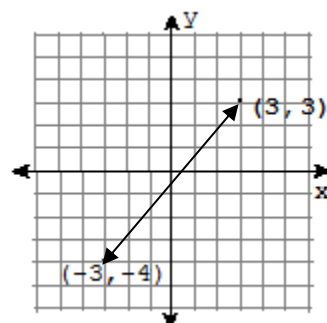
8. $(5, 1)$ and $(-2, -2)$

Find the slope of the line in the x-y plane:

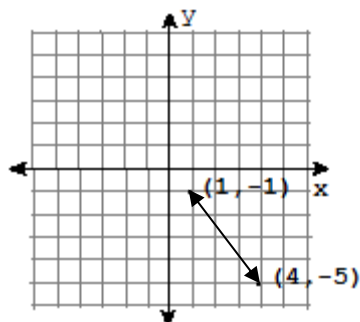
9.



10.



11.



12.

